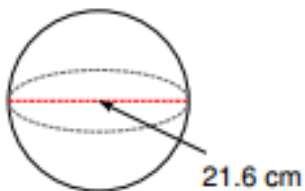


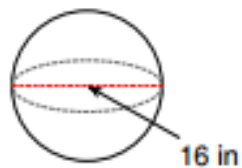
Name: _____

Find the volume of each figure. Round your answers to the nearest tenth, if necessary.

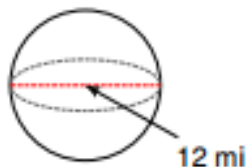
9)



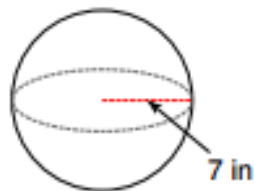
10)



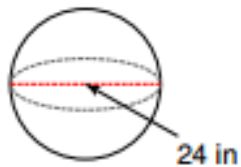
11)



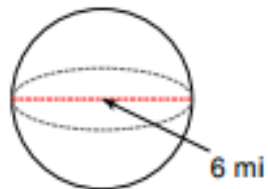
12)



13)



14)



15) A sphere with a diameter of 2 m.

16) A sphere with a diameter of 10 ft.