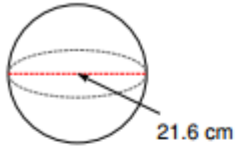


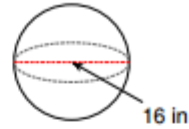
Find the volume of each figure. Round your answers to the nearest tenth, if necessary.

9)



5276.7 cm³

10)



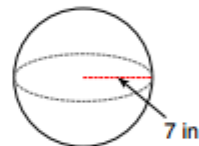
2144.7 in³

11)



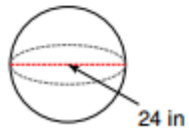
904.8 mi³

12)



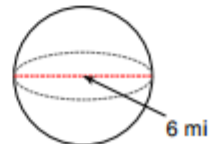
1436.8 in³

13)



7238.2 in³

14)



113.1 mi³

15) A sphere with a diameter of 2 m.

4.2 m³

16) A sphere with a diameter of 10 ft.

523.6 ft³